

Halloween

Roam the Rooms



5 ELA
5 MATH

Halloween

Room the Rooms



5 ELA
5 MATH

10 Halloween Room the Rooms

BY Teacher's Clubhouse

1/1/16
February 14, 2014

What number make 9

$4 + 4 =$

What number make 11


$1 + 6 = 6 +$

Vanishing Numbers

A Room the Room Balancing Equations Activity

centers
Enrichment
Early Finishers

Also Perfect For



Candy Corn Verbs

A Verb Tense Room the Room Activity


hop
hopped
will hop

PRESENT
PAST
FUTURE

dig
?
will dig

PRESENT
PAST
FUTURE

Write the missing verb.



5 Choose the correct homophone.

The _____ is faster than the tortoise.


Mister hair hare

February

Lane

7 Choose the correct homophone.

I will _____ a new game for



6 Choose the correct homophone.

Did you _____ the pencil?

hare break buy blew


sale won

A DATE with a monster!

A Room the Room Activity for Writing Dates Three Ways!


Write the date a different way.

Sept. 28, 2016
9/28/16



THE GREAT WITCH SWITCH

A Pronoun Room the Room Activity



Wrapped Up In HOMOPHONES

Room the Room

centers
Enrichment
Early Finishers

Also Perfect For

PAY TOLD
UT THINK

Write the missing fact from the family.


2+3=5
5-3=2
5-2=3

10-7=3
3+7=10
7+3=10



Write the missing fact from the family.

20-4=16
16+4=20
20-16=4




THE HOCUS POCUS BROOM CO.

An Abbreviation Room the Room Activity

12-3=9
14-10=4
3+5=8
5+7=12

2=15
17-8=9
3=7
19-9=10





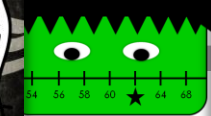

FRANKEN-LINE

A Room the Room Activity for Number Lines

the witch made the potion all by yourself.

What number is missing from the line?

5 12
11 7
2 6

It's always... TRICK-OR-TREAT TIME!

A Room the Room Activity for Writing Time

Write the trick-or-treat time a different way.


9:30
1:30





Write the missing fact from the family.

10-7=3
3+7=10
7+3=10



Write the missing fact from the family.

12-3=9
14-10=4
3+5=8
5+7=12



Pumpkin Patch Place Value




A Room the Room Activity

What is the value of the underlined digit?

88
200

ones
tens
hundreds

How much am I worth?

Haunted House FACT Families

A Room the Room Activity

Write the fact family.

three
forty-five
half past seven

